


Name \_\_\_\_\_


Date \_\_\_\_\_

**Circle the Ending Time**


Listen and draw the time on the clock (12 points)




1.




2.




3.




4.




5.



6.




7.




8.

Draw the time on the clock face and write (12 points)




9.

10:15 (quarter past 10)



10.

11:30 (half past 11)



11.

1:00 (1 o'clock)