

Properties of Parallelograms

Find the measurement indicated in each parallelogram.

1a.




2a.




3a.



3b.




4a.




4b.



5. $AP = 12.5$
Find BP



6a.



6b.



6c.

