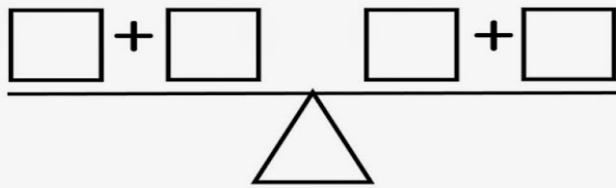


Name: _____

Balance the Scale

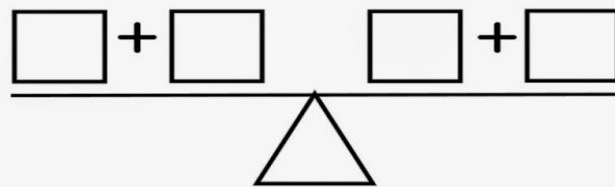
Directions: Use the numbers in the box to balance the scale.

1. $\square + \square$ $\square + \square$



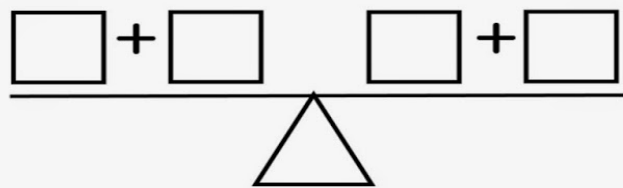
2 4 5 3

2. $\square + \square$ $\square + \square$



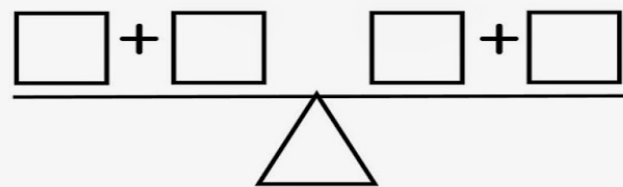
6 5 3 4

3. $\square + \square$ $\square + \square$



1 4 7 4

4. $\square + \square$ $\square + \square$



3 6 7 4