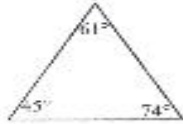


Name: \_\_\_\_\_  
Period: \_\_\_\_\_

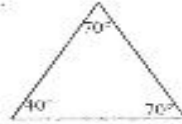
Applied Math 3  
Classifying Triangles

Classify each of the following triangles based on the information provided.

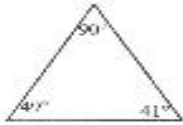
1.



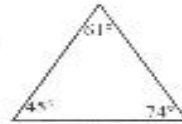
2.



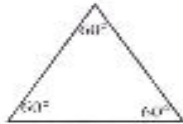
3.



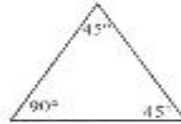
4.



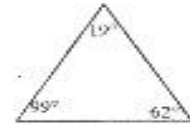
5.



6.



7.



8.

