


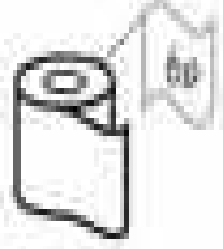


10 10 10 10 10 10 10 10 10 10 10 10 10 10 10 10 10 10 10 10 10 10

Name: \_\_\_\_\_

### Calculate the change from 10p



If you paid for each of the items below with a ten pence coin,  
how much change would you be given?



Change = \_\_\_\_\_

Change = \_\_\_\_\_

Change = \_\_\_\_\_

Change = \_\_\_\_\_

Change = \_\_\_\_\_

10



Change = \_\_\_\_\_

Change = \_\_\_\_\_

Change = \_\_\_\_\_

Change = \_\_\_\_\_

Change = \_\_\_\_\_

10



10 10 10 10 10 10 10 10 10 10 10 10 10 10 10 10 10 10 10 10 10 10