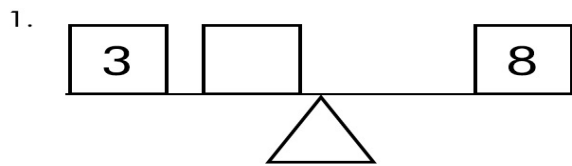
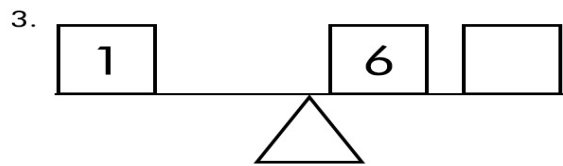


Balancing Addition Equations

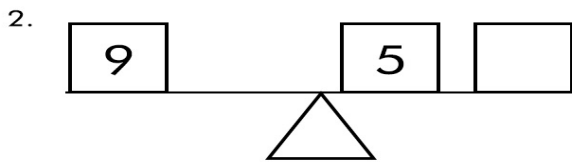
Write the missing number to make the scales balance. Then write a matching number sentence.



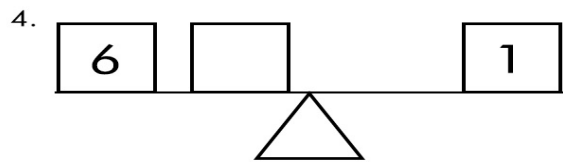
_____ + _____ = _____



_____ + _____ = _____



_____ + _____ = _____



_____ + _____ = _____

Write the missing numbers to make these true

