

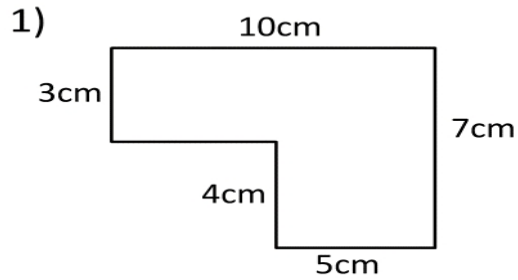
Name _____

Date _____



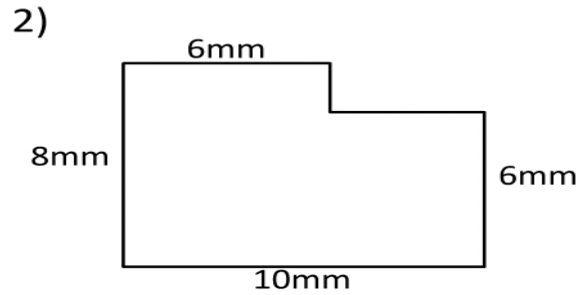
AREA AND PERIMETER SHEET 4

Work out the area and perimeter of the following shapes by finding the missing sides. The shapes are not to scale.



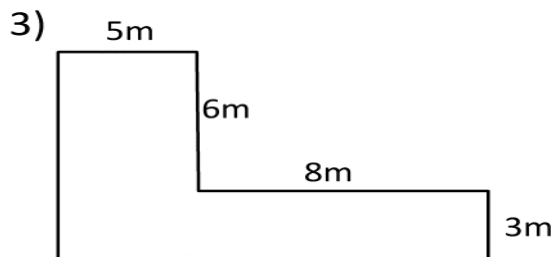
Area = _____ square cm (cm^2)

Perimeter = _____ m



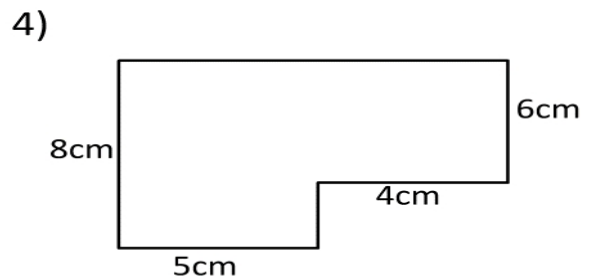
Area = _____ square mm (mm^2)

Perimeter = _____ mm



Area = _____ square m (m^2)

Perimeter = _____ m



Area = _____ square cm (cm^2)

Perimeter = _____ cm