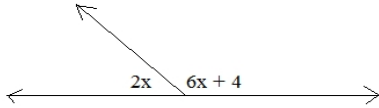


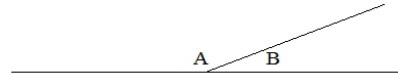
Angles Properties Quiz

1) Find x :

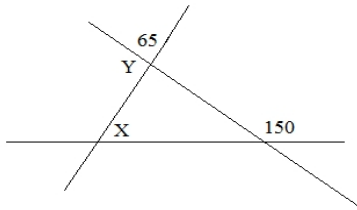


2) The ratio of A to B is 7:2

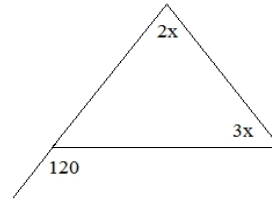
What is the measure of angle B?



3) Determine X and Y



4) What is the measure of the smallest angle?



5) Given: l and m are parallel.
Find the angles:

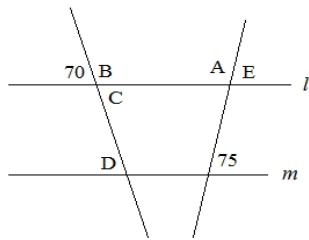
A:

B:

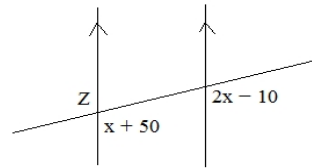
C:

D:

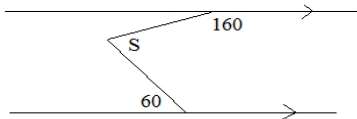
E:



6) What is the measure of angle Z?



7) Find S :



8) Find x :

