

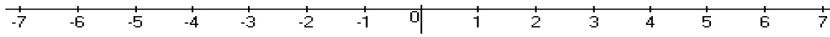
Student Name: _____

Score: _____

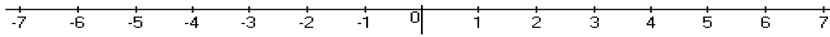
Solve and Graph

Work Space

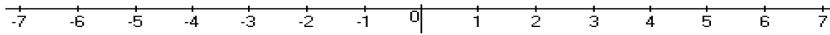
1) $x - 3 < -2$



2) $\frac{x}{5} \geq -1$



3) $2 \leq x - 4$



4) $-7x > -28$

