


Multiplying by 2



Write the problems.


How many pairs of feet?



sets of 2 =

x =

How many pairs of feet?



sets of 2 =

x =


How many pairs of feet?



sets of 2 =

x =

How many pairs of feet?



sets of 2 =

x =

How many pairs of feet?



sets of 2 =

x =

How many pairs of feet?



set of 2 =

x =

Draw different pictures to go with these problems.



$8 \times 2 = 16$



$10 \times 2 = 20$