

Mass

Name: _____

Measuring mass in grams and pounds.

These are the masses we
used to measure objects
on the balancing scales.



908g



454g



100g




50g



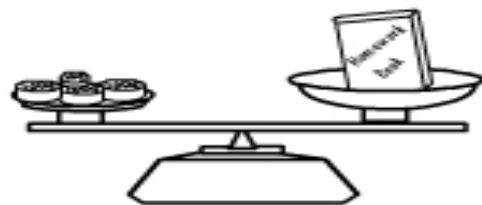
10g



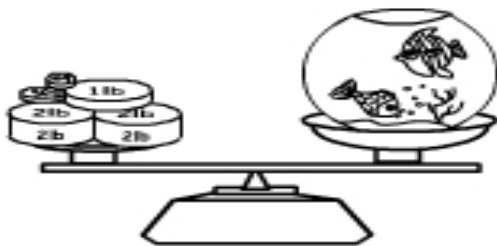
5g



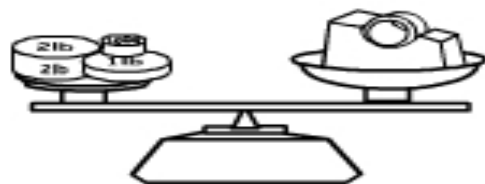
The teddy bear weighs _____ g



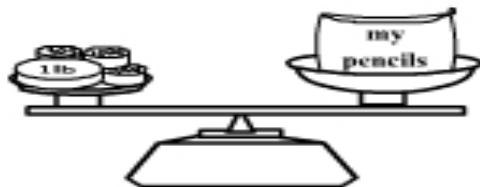
The book weighs _____ g



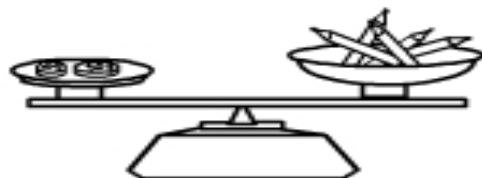
The fishtank weighs _____ g



The tape dispenser weighs _____ g



The pencilcase weighs _____ g



The pencils weighs _____ g