





**Secant-Tangent and Tangent-Tangent Angles**

Find the measure of the arc or angle indicated. Assume that lines which appear tangent are tangent.



**Subtract 2.** Assume that lines which appear tangent are tangent.

