



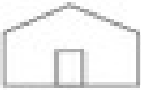










## Finding the Way

**Bear Mountain Farm**

**Map Key**

	apple orchard
	barn
	corn maze
	country store
	pony rides



Answer the questions.

1. What place does this map show? \_\_\_\_\_
2. What is the symbol for the country store? \_\_\_\_\_
3. What is north of the corn maze? \_\_\_\_\_
4. What is west of the barn? \_\_\_\_\_
5. How many apple orchards are on the farm? \_\_\_\_\_
6. What direction would you travel to move from the corn maze to the pony rides?  
\_\_\_\_\_

**Bonus Box:** Draw another barn east of the apple orchards.