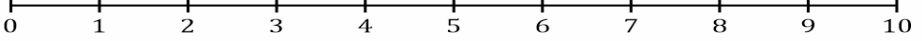


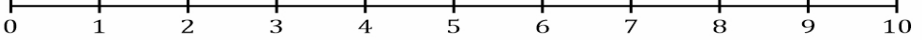
NUMBER LINE ADDITION

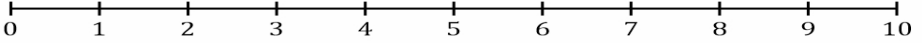
Name _____

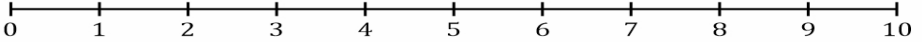
Date _____

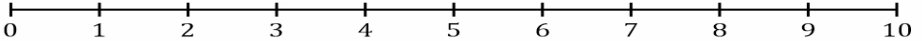
Finish the number sentences. Use the number line to help.

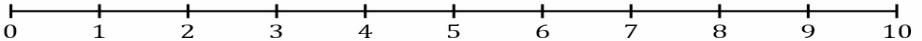
$4 + 3 = \square$ 

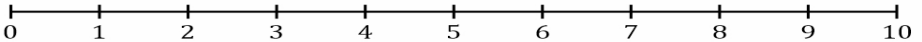
$5 + 3 = \square$ 

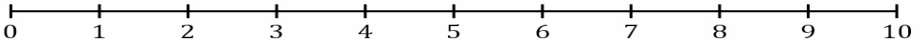
$6 + 2 = \square$ 

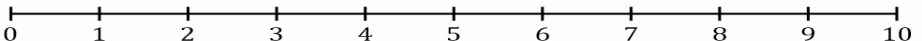
$1 + 3 = \square$ 

$4 + 5 = \square$ 

$5 + 5 = \square$ 

$7 + 2 = \square$ 

$2 + 2 = \square$ 

$3 + 6 = \square$ 

$2 + 4 = \square$ 