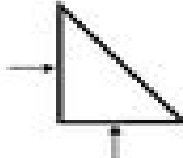





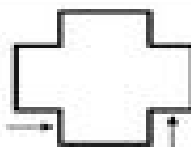
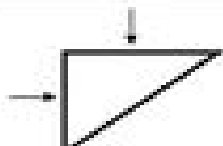
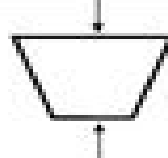
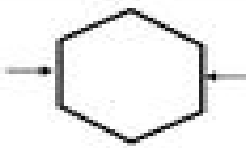

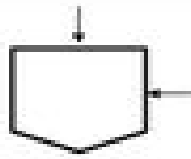


Identifying Parallel and Perpendicular Lines

For each figure below, describe the relationship between the lines indicated.
Write parallel or perpendicular in the space provided.

 <p>1. _____</p>	 <p>2. _____</p>	 <p>3. _____</p>
 <p>4. _____</p>	 <p>5. _____</p>	 <p>6. _____</p>
 <p>7. _____</p>	 <p>8. _____</p>	 <p>9. _____</p>
 <p>10. _____</p>	 <p>11. _____</p>	 <p>12. _____</p>