



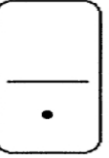



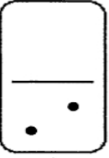




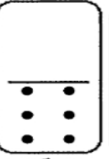

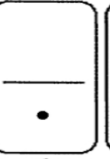
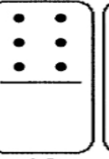
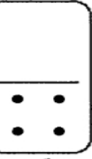


Name: _____

Domino Missing Addend

Directions: Find a domino that that solves each sum. Draw the missing dots. Don't use the same domino twice.

+						
	9	3	11	9	7	10
+						
	10	2	5	6	8	7
+						
	6	8	4	5	12	8