

Angle Relationship

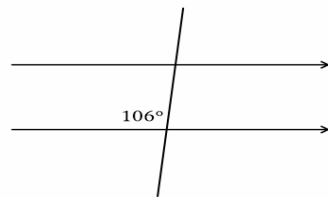
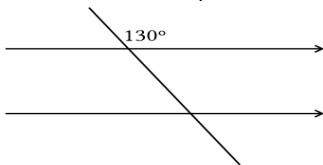
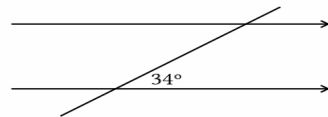
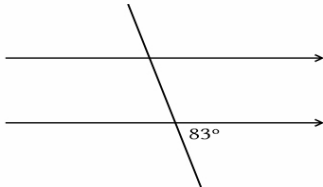
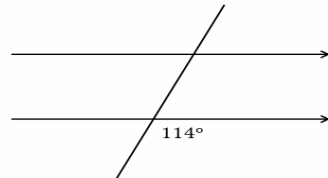
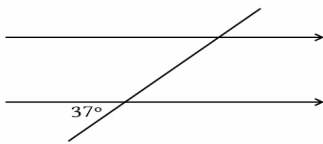
Worksheet

Name _____

Date _____

Transversal

Write down all the missing angles of measurement!



Vertical Angles

Find the vertical angle measurement for the measured angles!

