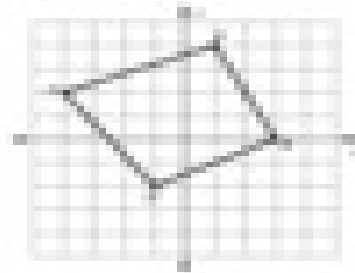



Instructions:

Graph the image of the figure using the transformation given.


1) rotate 180° about the origin




2) rotate 180° about the origin




3) rotate 90° counterclockwise about the origin



4) rotate 90° clockwise about the origin



5) rotate 90° clockwise about the origin



6) rotate 180° about the origin

