




Name _____ Date _____

Subtract:

$4 - 1 = \underline{\quad}$ 

$5 - 3 = \underline{\quad}$ 

$4 - 2 = \underline{\quad}$ 

$3 - 2 = \underline{\quad}$ 

$3 - 3 = \underline{\quad}$ 

$2 - 1 = \underline{\quad}$ 