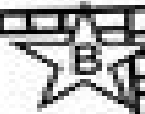



Name _____



GROUPS of ten

Circle each group of ten to help you count.




2 tens 3 ones


23



___ tens ___ ones



___ tens ___ ones



___ tens ___ ones

This was:
(Circle one)

Easy

Just Right

Hard