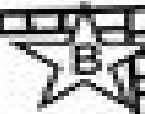



Name \_\_\_\_\_



# GROUPS of ten

Circle each group of ten to help you count.



2 tens 3 ones

23




\_\_\_ tens \_\_\_ ones

\_\_\_\_\_



\_\_\_ tens \_\_\_ ones

\_\_\_\_\_



\_\_\_ tens \_\_\_ ones

\_\_\_\_\_

This was:  
(Circle one)

Easy

Just Right

Hard