

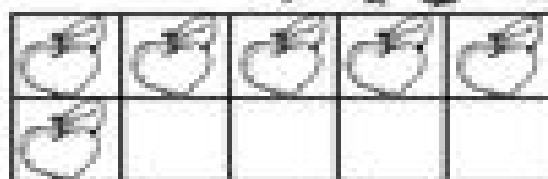
Name _____

Let's Make 10!


Directions: Complete the ten frame to make 10.
Write the number sentence.



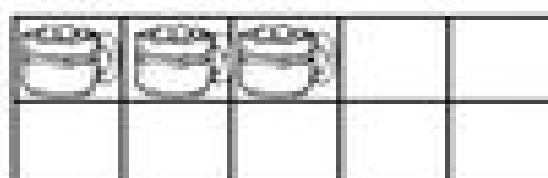
_____ + _____ = 10



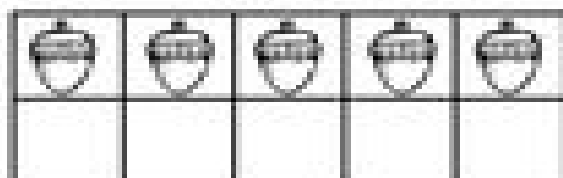
_____ + _____ = 10



_____ + _____ = 10



_____ + _____ = 10



_____ + _____ = 10



_____ + _____ = 10