



Name: _____

Math Practice: Understanding Fractions (3.NF.3)

3rd Grade
Tuesday
2nd 9 Weeks

Write the equivalent fractions.




Label the number lines. Identify the equivalent fractions.

Label $\frac{1}{2}$ $\frac{2}{2}$



What fractions are equivalent to 1? _____

Label $\frac{1}{8}$ $\frac{2}{8}$ $\frac{3}{8}$ $\frac{4}{8}$ $\frac{5}{8}$ $\frac{6}{8}$ $\frac{7}{8}$ $\frac{8}{8}$



What fractions are equivalent to $\frac{1}{2}$? _____

What fraction is equivalent to $\frac{1}{4}$? _____

What fraction is equivalent to $\frac{6}{8}$? _____

Label $\frac{1}{4}$ $\frac{2}{4}$ $\frac{3}{4}$ $\frac{4}{4}$



Compare. Write $<$ $>$ $=$



Express the whole numbers as fractions.

3 = _____

4 = _____

9 = _____

12 = _____

Explain your thinking.

My friend and I ordered a large cheese pizza. I ate $\frac{1}{2}$ of the pizza and my friend ate $\frac{2}{4}$ of the pizza. Who ate more? Show your thinking in words, pictures, and numbers.