










Name: _____

Chinese Dominoes

Found in China, the oldest domino sets date from around 1120 AD. Use the dominoes to write the addition sentence and answer.


 $\boxed{6} + \boxed{2} = \boxed{8}$ 
 $\boxed{} + \boxed{} = \boxed{}$ 
 $\boxed{} + \boxed{} = \boxed{}$ 
 $\boxed{} + \boxed{} = \boxed{}$ 
 $\boxed{} + \boxed{} = \boxed{}$ 
 $\boxed{} + \boxed{} = \boxed{}$ 
 $\boxed{} + \boxed{} = \boxed{}$ 
 $\boxed{} + \boxed{} = \boxed{}$