



Name: _____

Chinese Dominoes


Found in China, the oldest domino sets date from around 1120 AD. Use the dominoes to write the addition sentence and answer.



$$\boxed{6} + \boxed{2} = \boxed{8}$$



$$\boxed{} + \boxed{} = \boxed{}$$




$$\boxed{} + \boxed{} = \boxed{}$$




$$\boxed{} + \boxed{} = \boxed{}$$




$$\boxed{} + \boxed{} = \boxed{}$$



$$\boxed{} + \boxed{} = \boxed{}$$



$$\boxed{} + \boxed{} = \boxed{}$$



$$\boxed{} + \boxed{} = \boxed{}$$