










Name: \_\_\_\_\_

# Chinese Dominoes

Found in China, the oldest domino sets date from around 1120 AD. Use the dominoes to write the addition sentence and answer.

  
 $\boxed{6} + \boxed{2} = \boxed{8}$   
 $\boxed{\phantom{0}} + \boxed{\phantom{0}} = \boxed{\phantom{0}}$   
 $\boxed{\phantom{0}} + \boxed{\phantom{0}} = \boxed{\phantom{0}}$   
 $\boxed{\phantom{0}} + \boxed{\phantom{0}} = \boxed{\phantom{0}}$   
 $\boxed{\phantom{0}} + \boxed{\phantom{0}} = \boxed{\phantom{0}}$   
 $\boxed{\phantom{0}} + \boxed{\phantom{0}} = \boxed{\phantom{0}}$   
 $\boxed{\phantom{0}} + \boxed{\phantom{0}} = \boxed{\phantom{0}}$   
 $\boxed{\phantom{0}} + \boxed{\phantom{0}} = \boxed{\phantom{0}}$