




Name: \_\_\_\_\_


# Chinese Dominoes


Found in China, the oldest domino sets date from around 1120 AD. Use the dominoes to write the addition sentence and answer.





  
 $\boxed{6} + \boxed{2} = \boxed{8}$


  
 $\boxed{\phantom{0}} + \boxed{\phantom{0}} = \boxed{\phantom{0}}$


  
 $\boxed{\phantom{0}} + \boxed{\phantom{0}} = \boxed{\phantom{0}}$

  
 $\boxed{\phantom{0}} + \boxed{\phantom{0}} = \boxed{\phantom{0}}$

  
 $\boxed{\phantom{0}} + \boxed{\phantom{0}} = \boxed{\phantom{0}}$

  
 $\boxed{\phantom{0}} + \boxed{\phantom{0}} = \boxed{\phantom{0}}$

  
 $\boxed{\phantom{0}} + \boxed{\phantom{0}} = \boxed{\phantom{0}}$

  
 $\boxed{\phantom{0}} + \boxed{\phantom{0}} = \boxed{\phantom{0}}$