


Directions: Label each arrow with push, pull, friction, gravity, compression, or tension. Identify if the force is balanced or unbalanced and which direction it will move.

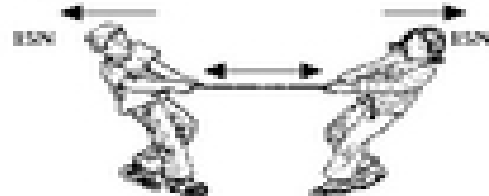
7.



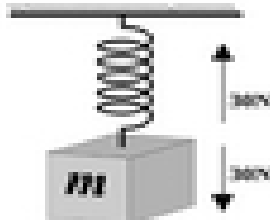
8.



9.



10.



11.



12. As the skydiver falls, the friction (air resistance) becomes equal to the downward pull of gravity. When these two forces become equal in magnitude, what will happen to the skydiver?