



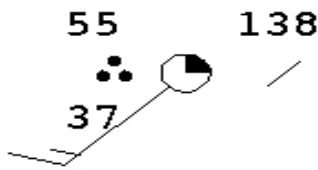
Name: \_\_\_\_\_

Date: \_\_\_\_\_ Your Period?: (1) (2) (3) (4) (5) (6)

# Reading Station Models Due?

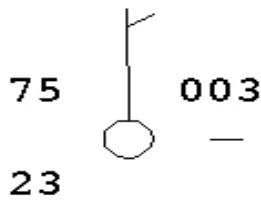
**Information:** Visit [sbaran.net](http://sbaran.net) to find the Web link you'll need to complete this assignment. You'll need to use Weather Map Symbols that are associated with Station Models. You can do this online at home (*our school computers may not have the capability*).

What is a "Station Model"? \_\_\_\_\_



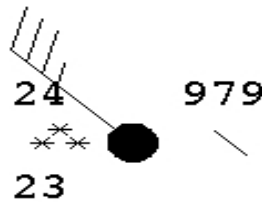
Temperature: \_\_\_\_\_  
 Wind Direction: \_\_\_\_\_  
 Cloud Cover: \_\_\_\_\_  
 Pressure Change: \_\_\_\_\_

Dew Point: \_\_\_\_\_  
 Wind Speed: \_\_\_\_\_  
 Pressure: \_\_\_\_\_  
 Current Weather: \_\_\_\_\_



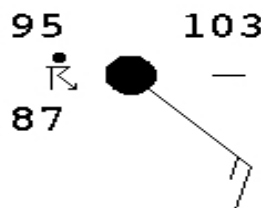
Temperature: \_\_\_\_\_  
 Wind Direction: \_\_\_\_\_  
 Cloud Cover: \_\_\_\_\_  
 Pressure Change: \_\_\_\_\_

Dew Point: \_\_\_\_\_  
 Wind Speed: \_\_\_\_\_  
 Pressure: \_\_\_\_\_  
 Current Weather: \_\_\_\_\_



Temperature: \_\_\_\_\_  
 Wind Direction: \_\_\_\_\_  
 Cloud Cover: \_\_\_\_\_  
 Pressure Change: \_\_\_\_\_

Dew Point: \_\_\_\_\_  
 Wind Speed: \_\_\_\_\_  
 Pressure: \_\_\_\_\_  
 Current Weather: \_\_\_\_\_



Temperature: \_\_\_\_\_  
 Wind Direction: \_\_\_\_\_  
 Cloud Cover: \_\_\_\_\_  
 Pressure Change: \_\_\_\_\_

Dew Point: \_\_\_\_\_  
 Wind Speed: \_\_\_\_\_  
 Pressure: \_\_\_\_\_  
 Current Weather: \_\_\_\_\_