




Name: \_\_\_\_\_


## Angles

Directions: Measure each angle using a protractor. Write the angle's measurement.  
Label the angles as acute, obtuse, right, or straight.


1.  \_\_\_\_\_  
\_\_\_\_\_


2.  \_\_\_\_\_  
\_\_\_\_\_


3.  \_\_\_\_\_  
\_\_\_\_\_


4.  \_\_\_\_\_  
\_\_\_\_\_


5.  \_\_\_\_\_  
\_\_\_\_\_

6.  \_\_\_\_\_  
\_\_\_\_\_

7.  \_\_\_\_\_  
\_\_\_\_\_

8.  \_\_\_\_\_  
\_\_\_\_\_

9.  \_\_\_\_\_  
\_\_\_\_\_

10.  \_\_\_\_\_  
\_\_\_\_\_