


Name: \_\_\_\_\_

# Digital Time

Write the digital time for each analog clock face.

1




\_\_\_\_

2



\_\_\_\_

3



\_\_\_\_

4



\_\_\_\_

5



\_\_\_\_

6




\_\_\_\_

7



\_\_\_\_

8



\_\_\_\_