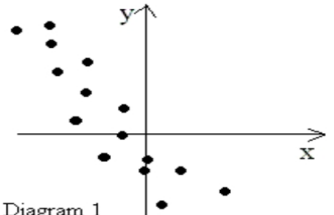
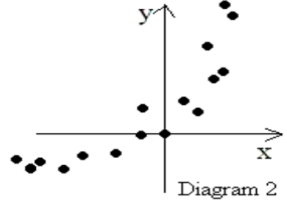
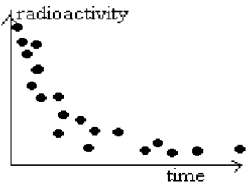
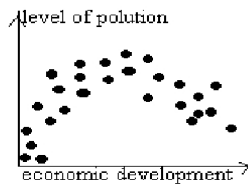



Worksheet: Scatter Diagrams & Line Of Best Fit (By Inspection)

Section A: Scatter Diagrams

1. Can we have non-linear relationship?

Identify the form of association of each diagram given below:

 <p>Diagram 1</p> <p>Form: _____</p>	 <p>Diagram 2</p> <p>Form: _____</p>
Diagram 3.	Diagram 4.
 <p>Form: _____</p>	 <p>Form: _____</p>
Diagram 6	
 <p>Form: _____</p>	