



Write each missing number.

1



3



5

6



8



10

11




13



15

16



18




20

21




23




25

26



28



30