



### Favorite Sport Tally

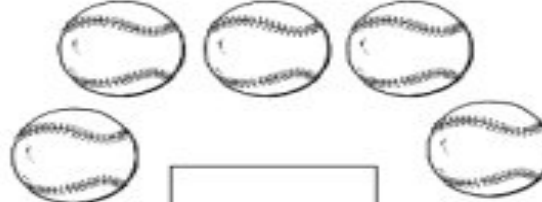
Use tally marks to show how many sports items are in each group. Then circle the number that shows how many. The first one is done for you.




A rectangular box containing five soccer balls. Below the box is a tally mark consisting of four vertical lines and one diagonal line crossing them, representing the number 5. Below the tally mark is a horizontal row of five numbers: 1, 2, 3, 4, and 5. The number 5 is circled.




A rectangular box containing five footballs. Below the box is an empty rectangular box for a tally mark. Below the box is a horizontal row of five numbers: 1, 2, 3, 4, and 5.



A rectangular box containing five baseballs. Below the box is an empty rectangular box for a tally mark. Below the box is a horizontal row of five numbers: 1, 2, 3, 4, and 5.



A rectangular box containing three hockey sticks. Below the box is an empty rectangular box for a tally mark. Below the box is a horizontal row of five numbers: 1, 2, 3, 4, and 5.



A rectangular box containing two basketballs. Below the box is an empty rectangular box for a tally mark. Below the box is a horizontal row of five numbers: 1, 2, 3, 4, and 5.



A rectangular box containing one target with an arrow hitting the bullseye. Below the box is an empty rectangular box for a tally mark. Below the box is a horizontal row of five numbers: 1, 2, 3, 4, and 5.