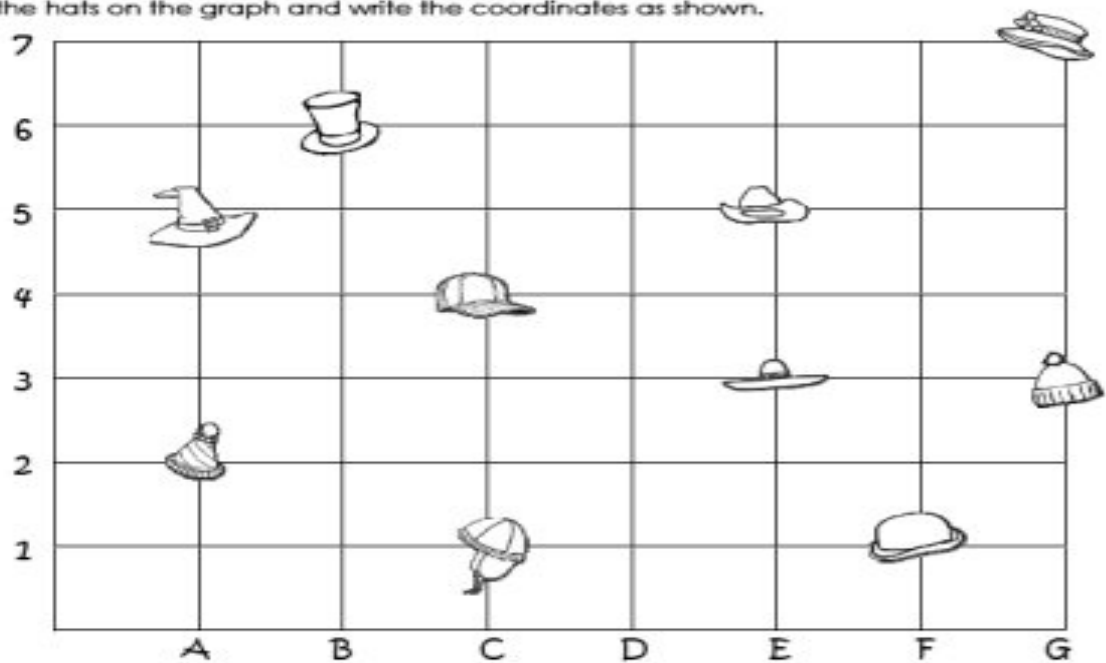







All Kinds of Hats Graphing Fun

Find the hats on the graph and write the coordinates as shown.



-  is at A, 2
-  is at _____, _____
-  is at _____, _____
-  is at _____, _____
-  is at _____, _____

-  is at _____, _____
-  is at _____, _____
-  is at _____, _____
-  are at _____, _____
-  is at _____, _____