


Name _____ Date _____


1. Shade seven fourths. Write this as a fraction and a mixed number.



Fraction
 $\frac{\square}{\square}$

Mixed Number
____ $\frac{\square}{\square}$

2. Shade eight thirds. Write this as a fraction and a mixed number.



Fraction
 $\frac{\square}{\square}$

Mixed Number
____ $\frac{\square}{\square}$

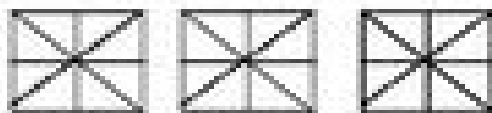
3. Shade six fifths. Write this as a fraction and a mixed number.



Fraction
 $\frac{\square}{\square}$

Mixed Number
____ $\frac{\square}{\square}$

4. Shade eighteen eighths. Write this as a fraction and a mixed number.



Fraction
 $\frac{\square}{\square}$

Mixed Number
____ $\frac{\square}{\square}$