







Name: \_\_\_\_\_

### Time Worksheet: Match clocks and times

What time is shown? Mark with X in the box of the correct time.

|   |  |
|---|--|
| <br><input type="checkbox"/> 6:00<br><input type="checkbox"/> 7:00<br><input type="checkbox"/> 8:00<br><input type="checkbox"/> 9:00       | <br><input type="checkbox"/> 2:00<br><input type="checkbox"/> 3:00<br><input type="checkbox"/> 4:00<br><input type="checkbox"/> 5:00   |
| <br><input type="checkbox"/> 7:00<br><input type="checkbox"/> 8:00<br><input type="checkbox"/> 9:00<br><input type="checkbox"/> 10:00     | <br><input type="checkbox"/> 7:00<br><input type="checkbox"/> 8:00<br><input type="checkbox"/> 9:00<br><input type="checkbox"/> 10:00 |
| <br><input type="checkbox"/> 11:00<br><input type="checkbox"/> 12:00<br><input type="checkbox"/> 13:00<br><input type="checkbox"/> 14:00 | <br><input type="checkbox"/> 1:00<br><input type="checkbox"/> 2:00<br><input type="checkbox"/> 3:00<br><input type="checkbox"/> 4:00 |