







Name _____

Triangles

Classify triangles.

Triangles are classified two ways: by how many sides and angles are equal, and by the type of angle.

Equilateral Three equal sides Three equal angles	Isosceles Two equal sides. Two equal angles.	Scalene No equal sides No equal angles
		
Right Triangle Has a 90-degree angle	Acute Triangle All angles less than 90 degrees	Obtuse Triangle Has an angle greater than 90 degrees
		

Write the two classifications for each triangle.

