

CLASSIFICATION OF CHEMICAL REACTIONS



PART I

Classify the reactions below as synthesis, decomposition, single replacement, or double replacement.


ANSWERS



Synthesis



Decomposition



Single Replacement




Synthesis




Decomposition



Single Replacement



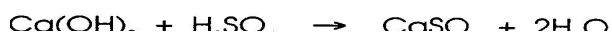
Synthesis



Double Replacement



Decomposition



Double Replacement