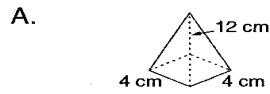


Volume of a Pyramid

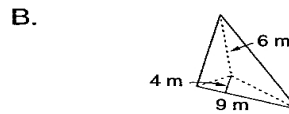
To find the volume of a pyramid, use the formula $\text{Volume} = \frac{1}{3} \cdot \text{Base} \cdot \text{height}$, where B is the area of the base and h is the height of the pyramid.

<p>Step #1 Find the Area of the Base</p> <p>If the base is a rectangle, use the formula $B = \text{length} \cdot \text{width}$.</p> <p>If the base is a triangle, use the formula $B = \frac{1}{2} \cdot b \cdot h$.</p>	<p>Step #2 Find the Volume of the Pyramid</p> <p>$V = \frac{1}{3} \cdot \text{Base} \cdot \text{height of the Pyramid}$</p>
---	--

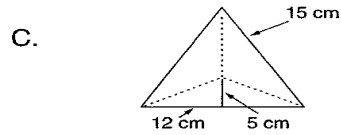
Find the volume of each pyramid. Use the formula $V = \frac{1}{3} \cdot \text{Base} \cdot \text{height}$



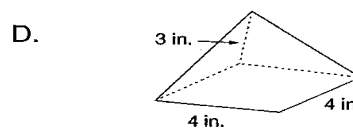
V = _____



V = _____



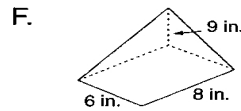
V = _____



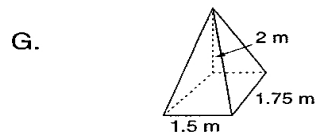
V = _____



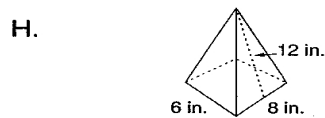
V = _____



V = _____



V = _____



V = _____