






Name _____

Weather Instruments

Identify the names and functions of weather instruments.
Match the weather instrument to the correct function.

- | | | | |
|----|---|-------------|------------------------------------|
| 1. |  | Barometer | a. measures temperature |
| 2. |  | wind sock | b. measures the speed of the wind |
| 3. |  | thermometer | c. measures the amount of rainfall |
| 4. |  | anemometer | d. measures air pressure |
| 5. |  | rain gauge | e. tells the direction of the wind |

What would an anemometer tell you about the weather?