

Print Worksheet

Name: \_\_\_\_\_

Date: \_\_\_\_\_

Convert each container's capacity milliliters.



0.75L

\_\_\_\_\_ mL



1 quart

\_\_\_\_\_ mL



0.25L

\_\_\_\_\_ mL



5 pints

\_\_\_\_\_ mL

Convert each container's capacity to liters.

1 pint



\_\_\_\_\_ L



\_\_\_\_\_ L

250mL



\_\_\_\_\_ L

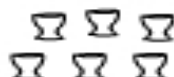
5 quarts



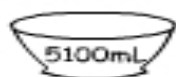
\_\_\_\_\_ L

Total Volume

Calculate the total volume these of containers.



25mL each



5100mL

3  
gallonstotal volume =  
\_\_\_\_\_ mL

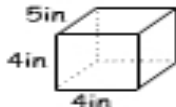
Calculating Volume



4in

6in

7in

volume =  
\_\_\_\_\_ in<sup>3</sup>

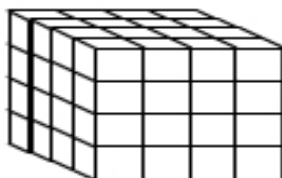
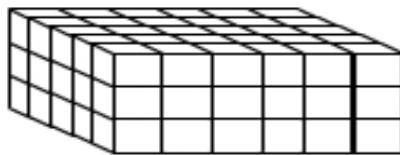
5in

4in

4in

volume =  
\_\_\_\_\_ in<sup>3</sup>

Volume of 3D Stacks

 = 1 cm<sup>3</sup>volume =  
\_\_\_\_\_ cm<sup>3</sup>volume =  
\_\_\_\_\_ cm<sup>3</sup>