

Name _____

Place Value

Tens and Ones to 50

Gathering Eggs

Write how many tens and ones.








Write the number.

Key

 = 1 egg  = 10 eggs



Beetle! Use the key to show the number 25. Write the number of tens and ones.

<p>A. </p>	<p>tens</p>	<p>ones</p>	<p>_____</p>
<p>B. </p>	<p>tens</p>	<p>ones</p>	<p>_____</p>
<p>C. </p>	<p>tens</p>	<p>ones</p>	<p>_____</p>
<p>D. </p>	<p>tens</p>	<p>ones</p>	<p>_____</p>
<p>E. </p>	<p>tens</p>	<p>ones</p>	<p>_____</p>
<p>F. </p>	<p>tens</p>	<p>ones</p>	<p>_____</p>
<p>G. </p>	<p>tens</p>	<p>ones</p>	<p>_____</p>