

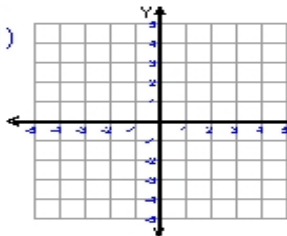
Name : _____

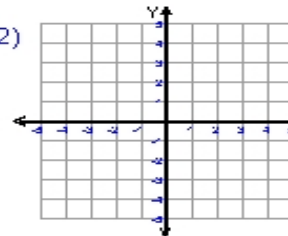
Score : _____

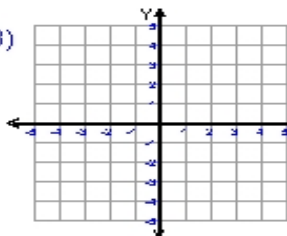
Teacher : _____

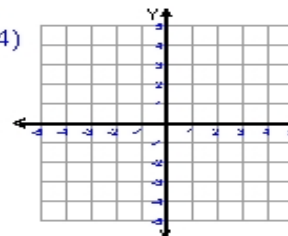
Date : _____

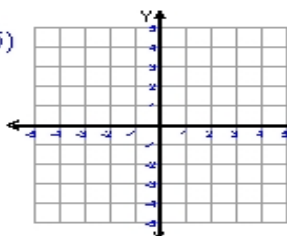
Sketch and Write the Equation For Each Line

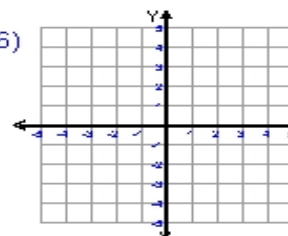
1)  equation _____
ordered pair = (-1,3)
slope (m) = _____
y-intercept = - 3

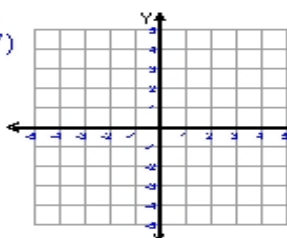
2)  equation _____
ordered pair = (3,-4)
slope (m) = _____
y-intercept = - 2

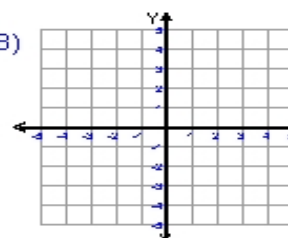
3)  equation _____
ordered pair = (-4,-1)
slope (m) = _____
y-intercept = 3

4)  equation _____
ordered pair = (-4,-3)
slope (m) = _____
y-intercept = 3

5)  equation _____
ordered pair = (3,0)
slope (m) = _____
y-intercept = 3

6)  equation _____
ordered pair = (3,-3)
slope (m) = _____
y-intercept = - 4

7)  equation _____
ordered pair = (-4,2)
slope (m) = _____
y-intercept = 4

8)  equation _____
ordered pair = (3,-3)
slope (m) = _____
y-intercept = 1

