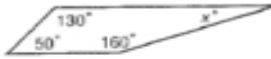
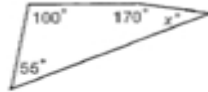


**6-4****Practice: Skills****Classifying Quadrilaterals**Find the value of  $x$  in each quadrilateral.

1.



2.



3.



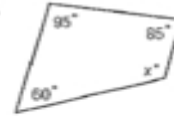
4.



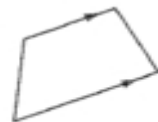
5.



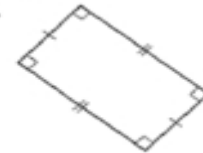
6.

Classify each quadrilateral using the name that *best* describes it.

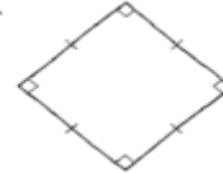
7.



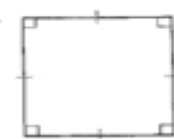
8.



9.



10.



11.



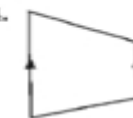
12.



13.



14.



15.

