


Name \_\_\_\_\_

# Place Value

Directions: Write how many tens and ones for each number.




32

\_\_\_ tens  
\_\_\_ ones




23

\_\_\_ tens  
\_\_\_ ones




40

\_\_\_ tens  
\_\_\_ ones




34

\_\_\_ tens  
\_\_\_ ones



100

\_\_\_ tens  
\_\_\_ ones



105

\_\_\_ tens  
\_\_\_ ones