



5.



$$40 + 10 = \square$$

- 40
- 10
- 50
- 60


6.



$$30 + 40 = \square$$

- 30
- 60
- 80
- 70


7.



$$24 + 10 = \square$$

- 34
- 24
- 70
- 10

8.



$$42 + 20 = \square$$

- 80
- 62
- 40
- 22