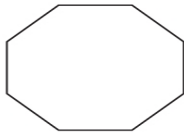


# LINES OF SYMMETRY

Name: \_\_\_\_\_ Date: \_\_\_\_\_

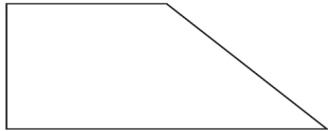
Draw and investigate the line of symmetry for each shape.



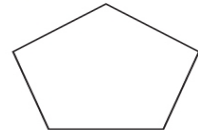
Name: \_\_\_\_\_  
Sides: \_\_\_\_\_  
Lines of Symmetry: \_\_\_\_\_



Name: \_\_\_\_\_  
Sides: \_\_\_\_\_  
Lines of Symmetry: \_\_\_\_\_



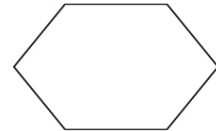
Name: \_\_\_\_\_  
Sides: \_\_\_\_\_  
Lines of Symmetry: \_\_\_\_\_



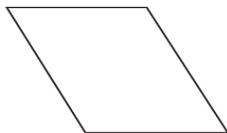
Name: \_\_\_\_\_  
Sides: \_\_\_\_\_  
Lines of Symmetry: \_\_\_\_\_



Name: \_\_\_\_\_  
Sides: \_\_\_\_\_  
Lines of Symmetry: \_\_\_\_\_



Name: \_\_\_\_\_  
Sides: \_\_\_\_\_  
Lines of Symmetry: \_\_\_\_\_



Name: \_\_\_\_\_  
Sides: \_\_\_\_\_  
Lines of Symmetry: \_\_\_\_\_



Name: \_\_\_\_\_  
Sides: \_\_\_\_\_  
Lines of Symmetry: \_\_\_\_\_