


# LINES OF SYMMETRY

Name: \_\_\_\_\_ Date: \_\_\_\_\_

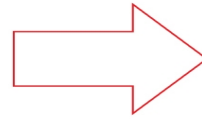
Draw and write down how many lines of symmetry each shape has.



Lines of Symmetry:



Lines of Symmetry:



Lines of Symmetry:



Lines of Symmetry:



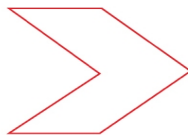
Lines of Symmetry:



Lines of Symmetry:



Lines of Symmetry:



Lines of Symmetry:



Lines of Symmetry: