




Measurement Worksheet

Comparing Lengths


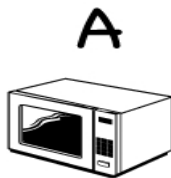
Name _____

1. Which object has the longest side?



Answer _____

2. Which object has the longest side?



Answer _____